

# Times Tables Games Printable Resources

Samples taken from from the Ultimate  
Times Tables Resource Pack

# Contents

|                                    |       |
|------------------------------------|-------|
| Multiplication of 2 cards up to 20 | 1-2   |
| Tens Meet in the Middle resource   | 3-13  |
| Multiplication of 3 cards up to 36 | 14-16 |
| Medium Digit cards 0-10            | 17-21 |
| Find the Cheese! Game board        | 22    |
| Large digit cards 0-12             | 23-34 |
| The Equaliser numbers list         | 35    |

**Resource 1** Multiples of 2 Cards Up to 20

2

4

6

8

10

12

14

16

18

20

**Resource 2** Tens Meet in the Middle

20

40

10

30

60

80

50

70

100

120

90

110

20

40

10

30



60

80

50

70

100

120

90

110

20

40

10

30

60

80

50

70

100

120

90

110

60

80

50

70

100

120

90

110

**Resource 3** Multiples Of 3 Cards Up To 36

12

9

6

3

24

21

18

15



36

12

33

9

30

6

27

3

15

18

21

24


27




30



33



36

**Resource 4** Medium Digit Cards 0-10









O

H



o

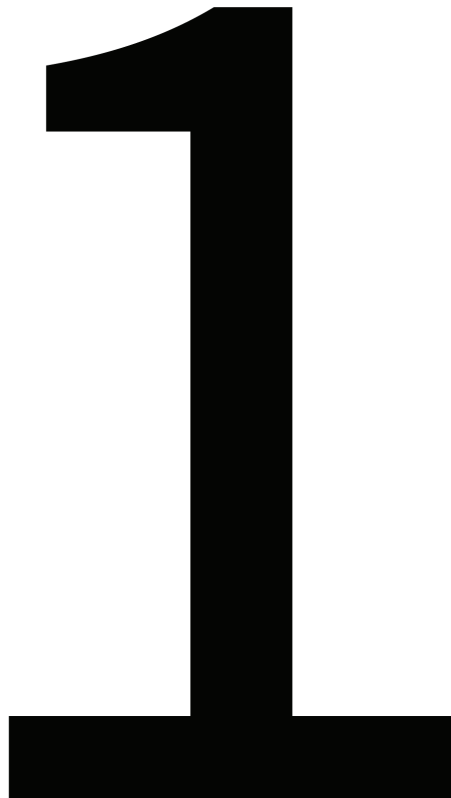
**Resource 5** Find The Cheese Game Board

The game board consists of 26 numbered squares arranged in a grid. The numbers and their corresponding math problems or instructions are as follows:

- 1: START!
- 2:  $2 \times 4 = ?$
- 3:  $5 \times 9 = ?$
- 4: MOUSE TRAP! MISSA GO!
- 5:  $33 \div 3 = ?$
- 6:  $8 \times ? = 24$
- 7:  $3 \times 9 = ?$
- 8: YOU GET LOST! GO BACK TWO SQUARES!
- 9:  $11 \times ? = 88$
- 10:  $9 \times 5 = ?$
- 11:  $96 \div 8 = ?$
- 12: MOUSE TRAP! MISSA GO!
- 13:  $7 \times ? = 21$
- 14:  $4 \times 9 = ?$
- 15:  $6 \times 8 = ?$
- 16: YOU GET LOST! GO BACK TWO SQUARES!
- 17:  $35 \div 5 = ?$
- 18:  $8 \times 3 = ?$
- 19:  $12 \div ? = 3$
- 20: MOUSE TRAP! MISS TWO GOES!
- 21:  $8 \times 12 = ?$
- 22:  $48 \div ? = 12$
- 23: GO BACK 9 SQUARES!
- 24:  $6 \times 3 = ?$
- 25:  $44 \div ? = 11$
- 26: GO BACK 10 SQUARES!

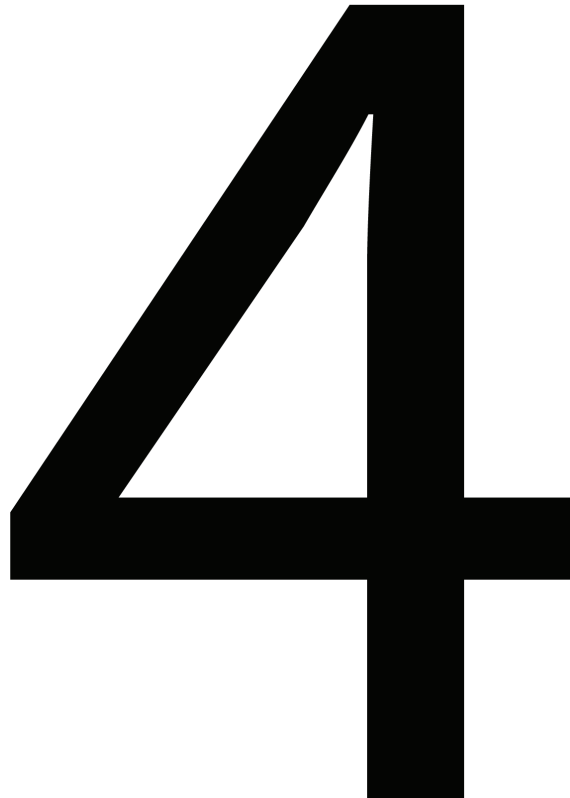


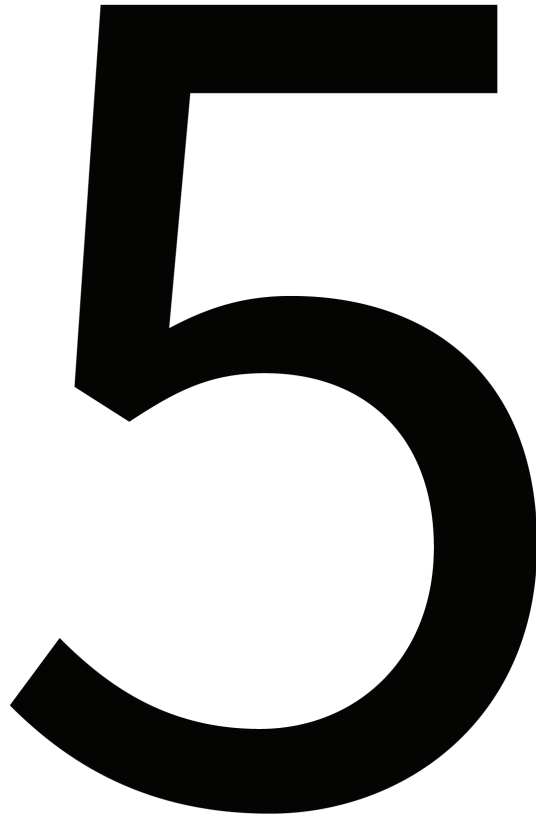
**Resource 6** Large Digit Cards 0-12




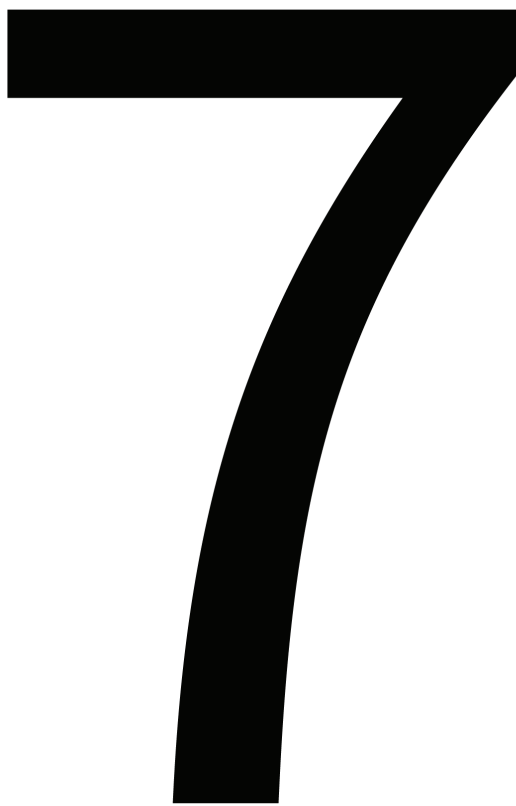


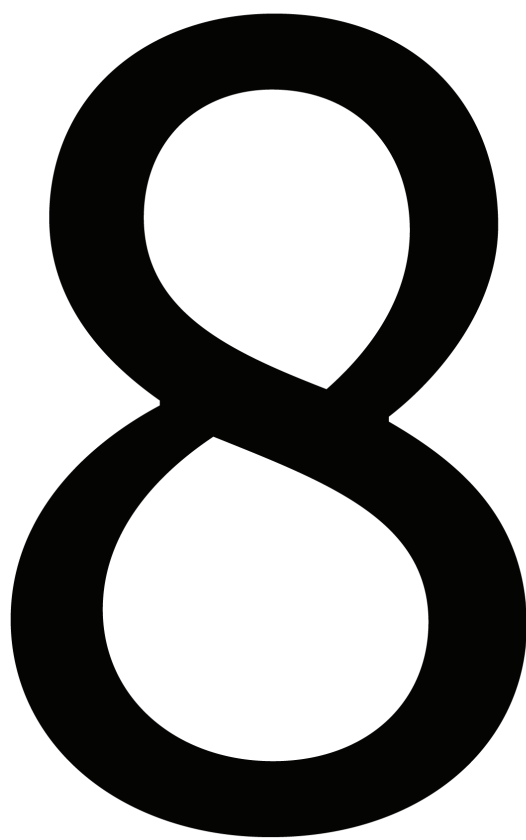









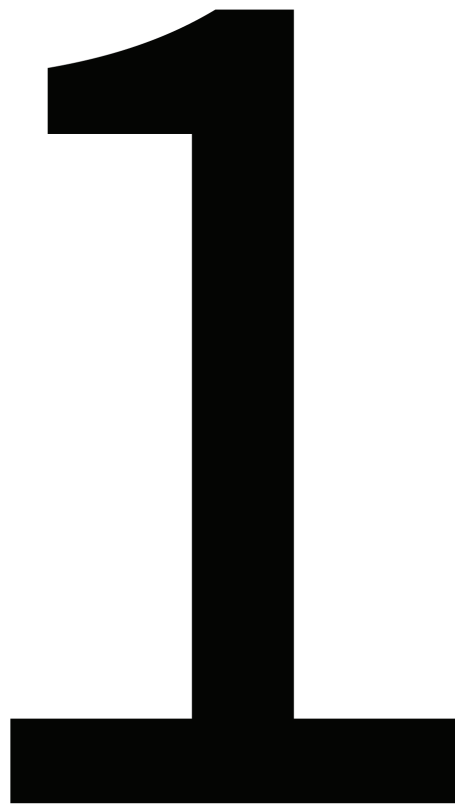
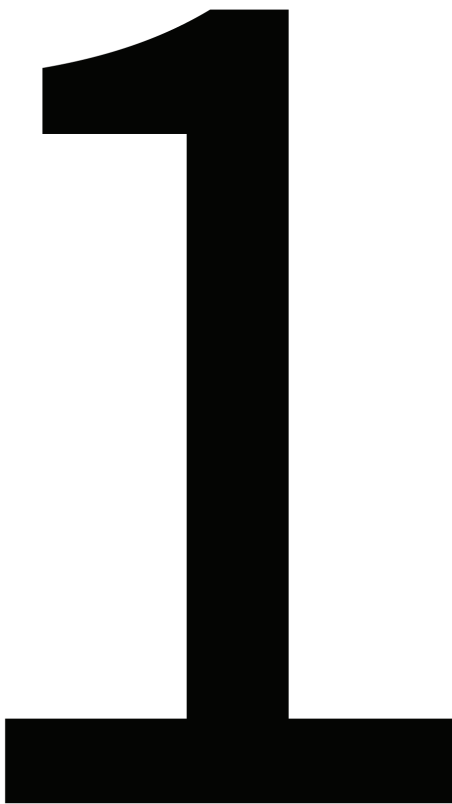








10



12

# The equaliser Y6

## Can you beat the equaliser?

Can you work out what you need to multiply or divide each of the numbers below by so that they become the same value? Each number can be multiplied/divided by a different number.

**0.24 12 0.048 1,800**

Now, have a go at these sets.

### Things to think about

Your teacher will start to include some multiples of 10 and 100 in their questions. Can you still work out the answer quickly?

Set 2 Set 3 Set 4

0.11 770 8,000 0.5 1,600 0.36


0.55 220 0.4 4,000 2.8 4,800


## Do you have a group of pupils who need a boost in maths this term?

Each pupil could receive a personalised lesson every week from our specialist 1-to-1 maths tutors.

- Raise attainment
  - Plug any gaps or misconceptions
  - Boost confidence
- 

### Speak to us:

 [thirdspacelearning.com](https://thirdspacelearning.com)

 0203 771 0095

 [hello@thirdspacelearning.com](mailto:hello@thirdspacelearning.com)