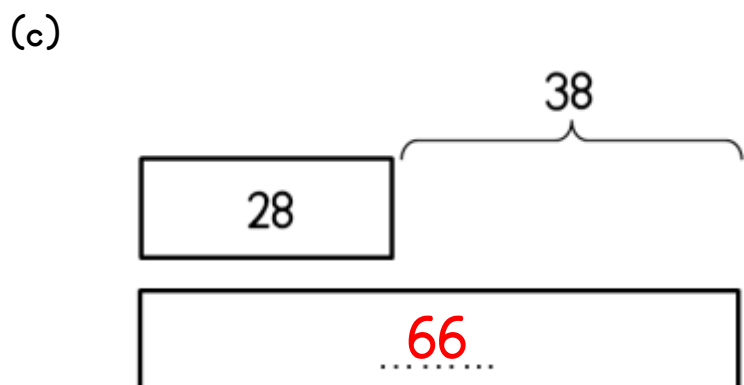
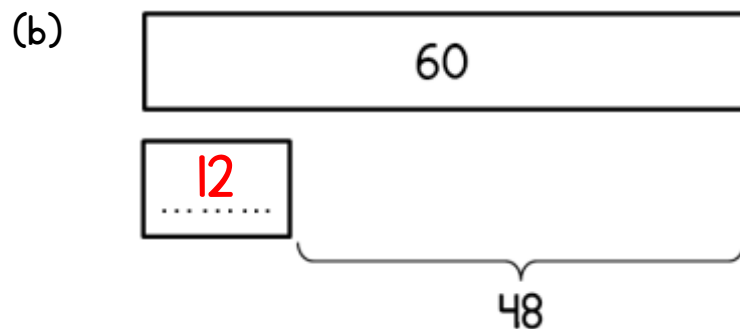
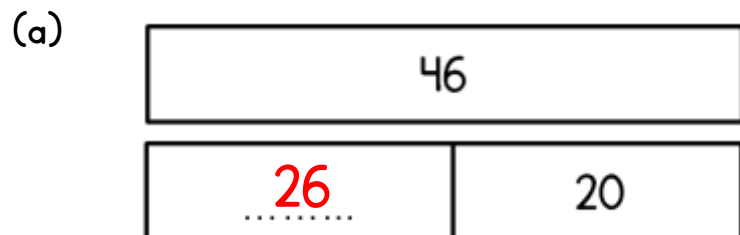


Bar Models 2

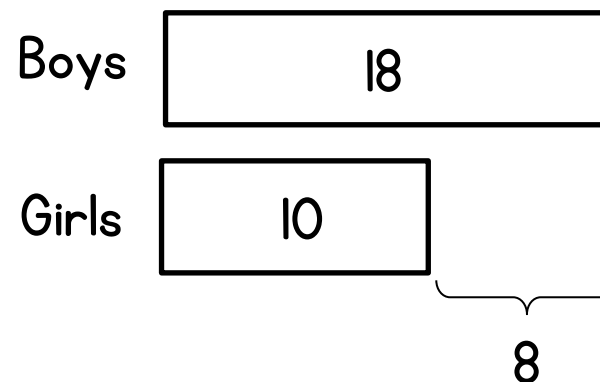
Name: _____

Teacher: _____

1 Work out the missing values.



2 The bar model shows information about children in a class.



Complete the following sentences

There are **18** boys in the class.

There are **10** girls in the class.

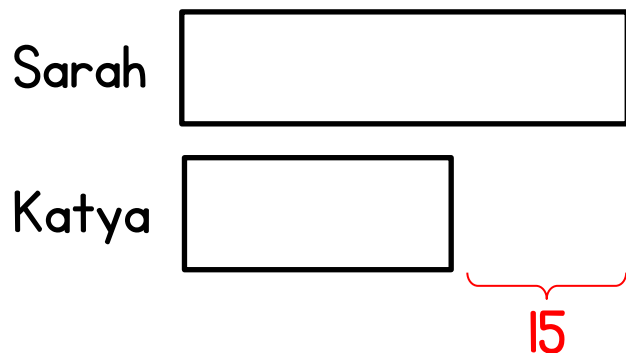
There are 8 **more** boys in the class than girls.

There are 8 **fewer** girls in the class than boys.

There are **28** children in the class.

3 Sarah has 15 more flowers than Katya.

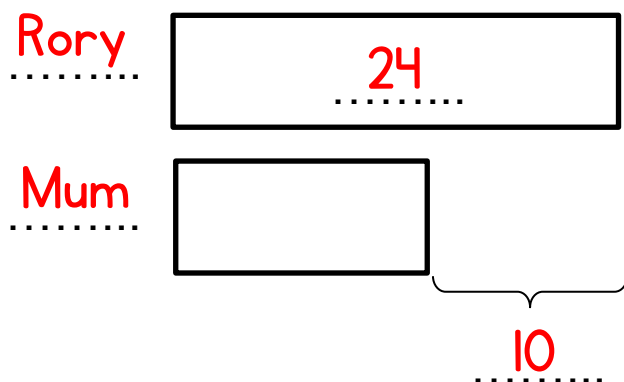
Show this on the diagram.



4 Rory bakes 24 buns.

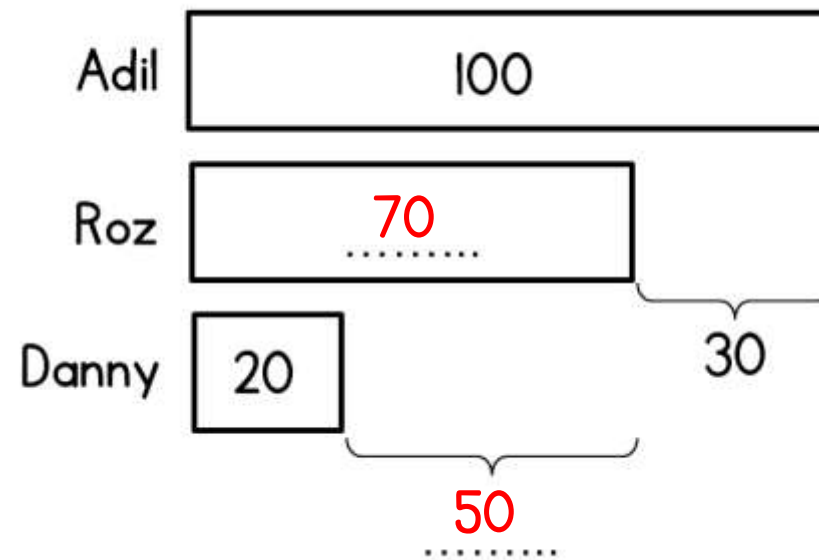
His Mum bakes 10 fewer buns.

Complete the diagram.



5 Adil, Roz and Danny have some bricks.

Complete the missing values.



Complete the following sentences

Adil has 100 bricks.

Roz has 30 **fewer** bricks than Adil.

Roz has **50** more bricks than Danny.

Adil has **80 more** bricks than Danny