

# Wordy Questions

1

Lisa owns a coffee shop.

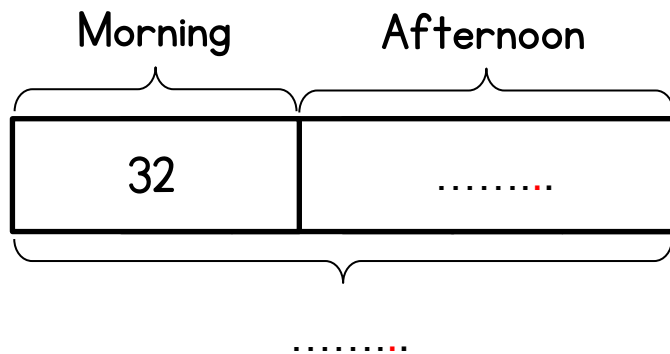
In the morning she sells 32 mugs of tea.

In the afternoon she sells 45 mugs of tea.

How many mugs of tea does she sell in total?



Complete the diagram.



Complete the number sentence

$$..... + ..... = .....$$

Lisa sells ..... mugs of tea in total.

2

Here are Mr and Mrs Flint's cases.

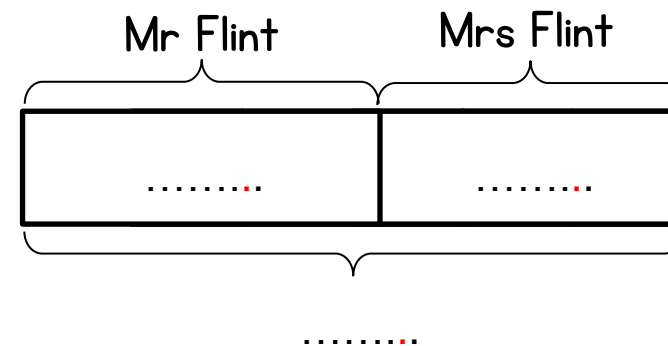
Mr Flint's case weighs 34kg.

In total the cases weigh 63kg

How much does Mrs Flint's case weigh?



Complete the diagram.



Complete the number sentence

$$..... - ..... = .....$$

Mrs Flint's case weighs ..... kg.

3

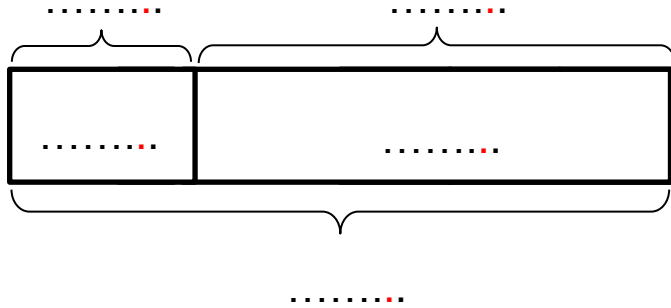
Sarah cycles 12 miles on Monday.

She cycles 63 miles on Tuesday.

How many miles does she cycle in total?



Complete the diagram.



Complete the number sentence

$$\dots + \dots = \dots$$

Sarah cycles ..... miles in total.

4

66 people are watching a football match.

There are 38 children watching.

How many adults are watching?



5

Evan bakes 26 muffins.

His mum bakes the same amount.

How many muffins do they bake altogether?

- 6 There are 28 pupils in Mr Khan's class.  
There are 15 boys in the class.  
How many girls are there in the class?

- 7 Here are two number cards.  
The total of the two cards is 57  
Work out the number on the other card.



- 8 Everyday Mike drives from his home to work.  
He then drives home again.  
It is 18 miles from his home to work.



- (a) How far does he travel in one day?  
(b) How far does he travel in two days?