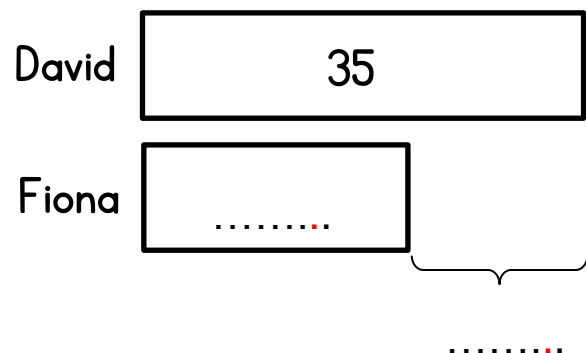


Wordy Questions

- 1 David catches 35 fish.
Fiona catches 21 fish.
How many more fish does David catch?



Complete the diagram.



Complete the number sentence

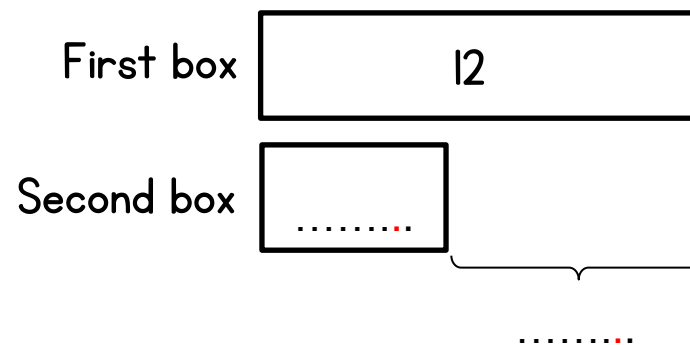
$$..... - =$$

David catches more fish than Fiona.

- 2 Here are two boxes of pencils.
There are 12 pencils in the first box.
The second box has 8 fewer pencils in it.
How many pencils are in the second box?



Complete the diagram.



Complete the number sentence

$$..... - =$$

The second box has pencils in it.

3

Mrs Dawson has two dogs.

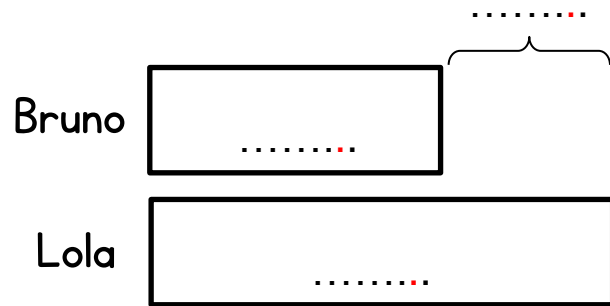
Bruno weighs 26kg.

Lola weighs 12kg more than Bruno.

How much does Lola weigh?



Complete the diagram.



Complete the number sentence

$$\dots + \dots = \dots$$


Lola weighs kg.

4

Jo reads 30 books in a year.

Her friend Gary reads 12 fewer books.

How many books does Gary read?



5

Nima drives 44 miles on Monday.

On Tuesday Nima drives 15 more miles.

How many miles does she drive on Tuesday?



6



Harriet

I am thinking of the number 48



Lisa

My number is 29 less than this.

What number is Lisa thinking of?

7

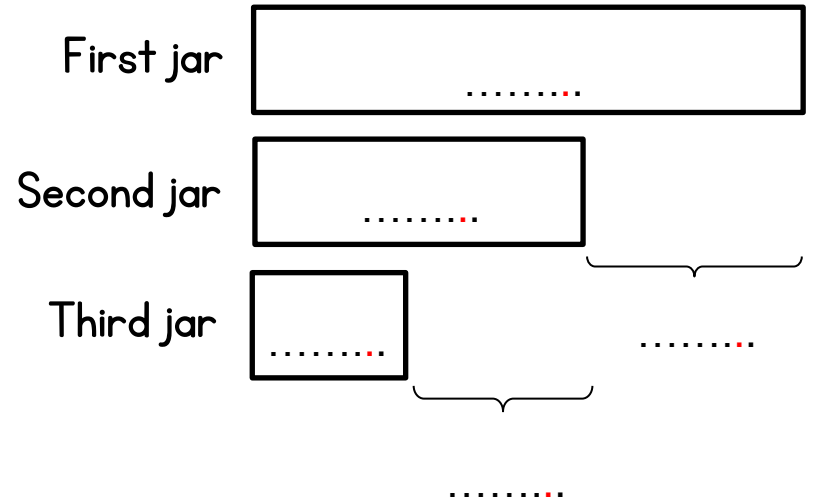
Three jars have bugs in them.

- The first jar has 95 bugs.
- The second jar has 38 fewer bugs.
- The third jar has 25 bugs.



How many more bugs are in the second jar than the third jar?

Complete the diagram.



Working out.